



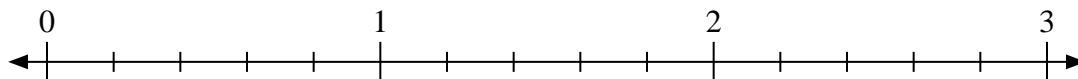
Use the numberline to solve.

Answers

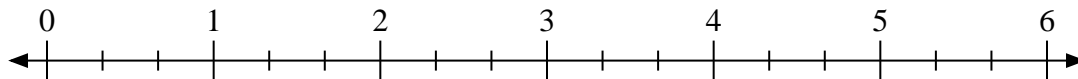
1) $2 \div \frac{2}{5}$




2) $3 \div \frac{3}{5}$



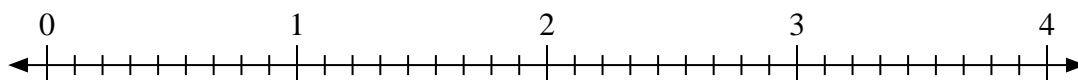
3) $3 \div \frac{1}{3}$



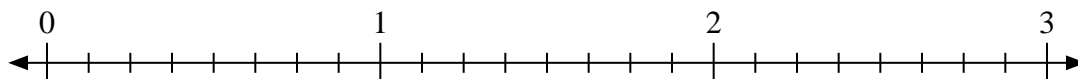
4) $2 \div \frac{1}{3}$



5) $3 \div \frac{8}{9}$



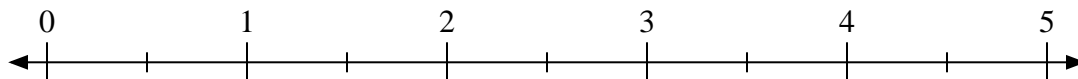
6) $2 \div \frac{5}{8}$



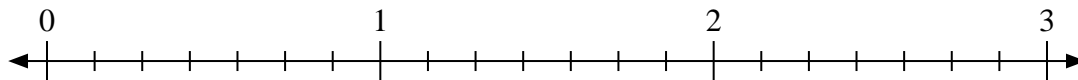
7) $4 \div \frac{1}{4}$



8) $4 \div \frac{1}{2}$



9) $3 \div \frac{6}{7}$



1. _____

2. _____

3. _____

4. _____

5. _____

6. _____

7. _____

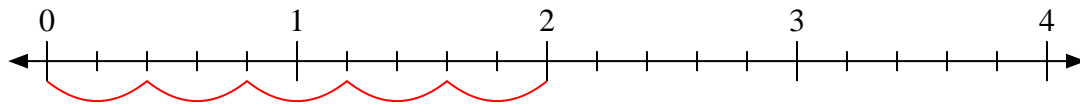
8. _____

9. _____

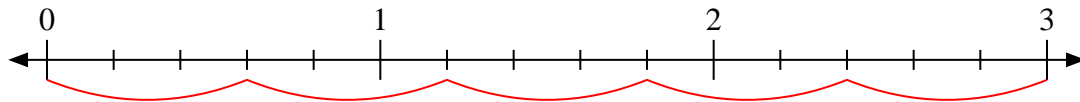


Use the numberline to solve.

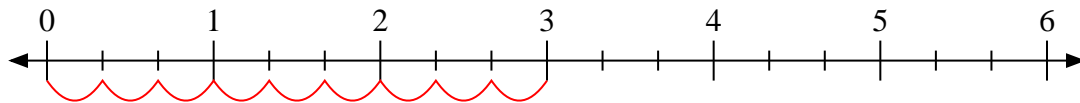
1) $2 \div \frac{2}{5}$



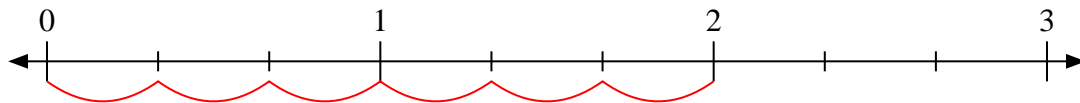
2) $3 \div \frac{3}{5}$



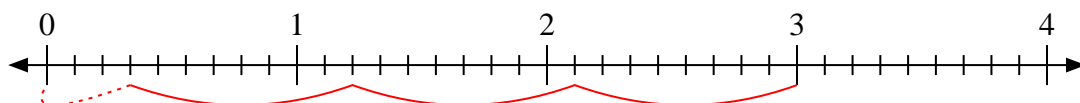
3) $3 \div \frac{1}{3}$



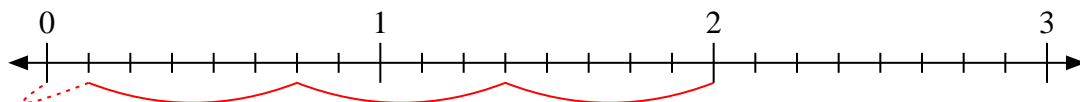
4) $2 \div \frac{1}{3}$



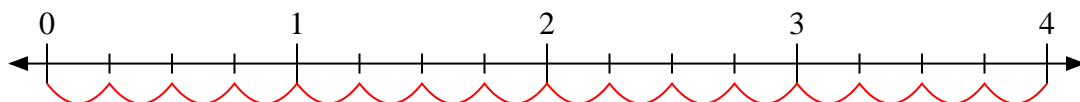
5) $3 \div \frac{8}{9}$



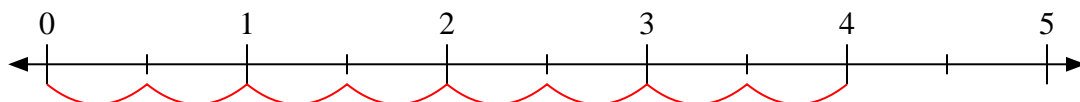
6) $2 \div \frac{5}{8}$



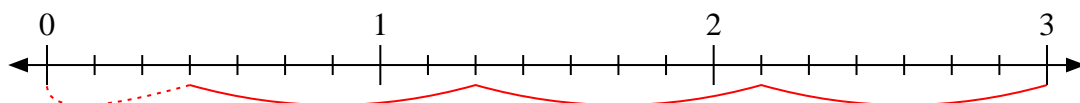
7) $4 \div \frac{1}{4}$



8) $4 \div \frac{1}{2}$



9) $3 \div \frac{6}{7}$



Answers

1. 5

2. 5

3. 9

4. 6

5. $3 \frac{3}{8}$

6. $3 \frac{1}{5}$

7. 16

8. 8

9. $3 \frac{3}{6}$